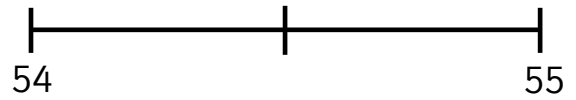
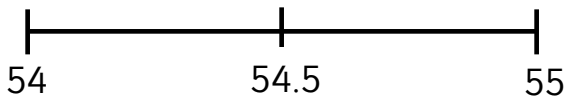


Guided Learning Task 1 (Round the number in the box to the **nearest whole number**; mark it on the line and circle the number it rounds to.)

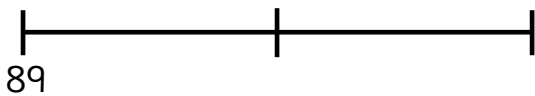
a) 54.634

b) 54.364



c) 89.492

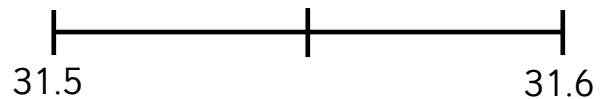
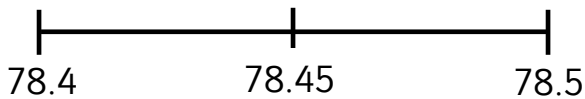
d) 149.602



Guided Learning Task 2 (Round the number in the box to the **nearest tenth**; mark it on the line and circle the number it rounds to.)

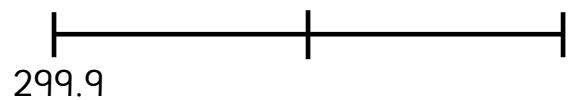
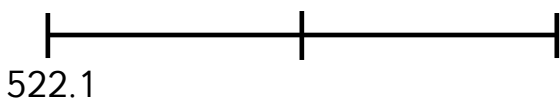
e) 78.447

f) 31.558



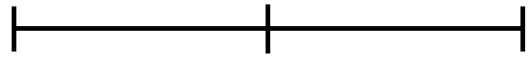
g) 522.193

h) 299.966



Independent Learning Tasks

i) Round 75.932 to the nearest 1



j) Round 75.932 to the nearest 0.1



k)

93.062 $\xrightarrow{\text{Rounded to the nearest one}}$

l)

327.702 $\xrightarrow{\text{Rounded to the nearest tenth}}$

m) Tick the numbers that round to 28 to the nearest whole number.

28.079

27.651

28.571

28.475

27.499

n) Circle the number that is closest to 20

19.955

20.1

19.09

20.099

20.201

o) Kim's mum bought wood to make two shelves.

The first shelf was 2.86 m long.

And the other shelf was 3.9 m long.

What is the shortest length of wood she must to buy to make the two shelves?

Circle the correct answer to the nearest metre.

3 m

4 m

5 m

6 m

7 m

8m